

Time



Draw hands to show the time. Write.

a




2 o'clock

b



6 o'clock

c



4 o'clock

d




1 o'clock

e




5 o'clock

f




7 o'clock

g




8 o'clock

h




12 o'clock

i




10 o'clock

j




3 o'clock

k



11 o'clock

l



9 o'clock

